

# Year 2 Spring 1 Maths Activity Mat 4

## Section 1

Fill in the missing numbers.

20, 18, , , 12,



## Section 2

Alice has 20p. Sweets cost 5p each. How many can she buy?



## Section 3

What number is five less than 21?

## Section 4

$14 + \square = 20$

$17 + \square = 25$

$18 - \square = 9$

## Section 5

A square has how many corners?

## Section 6

Tick the sphere.



## Section 7

Carry on the sequence.

45, 55, 65, , ,



## Section 8

If  $28 = 20 + 8$ , then  $31 =$

# Year 2 Spring 1 Maths Activity Mat 4 Answers

## Section 1

Fill in the missing numbers.

20, 18, , , 12,



## Section 2

Alice has 20p. Sweets cost 5p each. How many can she buy?



## Section 3

What number is five less than 21?

## Section 4

$$14 + \boxed{6} = 20$$

$$17 + \boxed{8} = 25$$

$$18 - \boxed{9} = 9$$

## Section 5

A square has how many corners?

## Section 6

Tick the sphere.



## Section 7

Carry on the sequence.

45, 55, 65, , ,



## Section 8

If  $28 = 20 + 8$ , then  $31 =$

# Year 2 Spring 1 Maths Activity Mat 4

## Section 1

Fill in the missing numbers.

, 26, 29, ,



## Section 2

Alex has £1.  
Pencils cost 20p  
each. How many  
can she buy?



## Section 3

What number  
is nine less  
than 34?

## Section 4

$$16 + \square = 32$$

$$38 - \square = 23$$

$$26 + \square = 48$$

## Section 5

Three  
triangles  
would have  
how many  
corners?

## Section 6

Tick the cuboids.



## Section 7

Carry on the sequence.

110, 100, 90, , ,



## Section 8

If  $42 = 40 + 2$ ,  
then  $57 =$

# Year 2 Spring 1 Maths Activity Mat 4 Answers

## Section 1

Fill in the missing numbers.

, 26, 29,  ,



## Section 2

Alex has £1.  
Pencils cost 20p  
each. How many  
can she buy?



## Section 3

What number  
is nine less  
than 34?

## Section 4

$$16 + \boxed{16} = 32$$

$$38 - \boxed{15} = 23$$

$$26 + \boxed{22} = 48$$

## Section 5

Three  
triangles  
would have  
how many  
corners?

## Section 6

Tick the cuboids.



## Section 7

Carry on the sequence.

110, 100, 90,  ,  ,



## Section 8

If  $42 = 40 + 2$ ,  
then  $57 =$

# Year 2 Spring 1 Maths Activity Mat 4

## Section 1

Fill in the missing numbers.

34, 39, , 49, ,




## Section 2

Selima has £1.40.  
She spends 50p on  
a chocolate bar.  
How much does  
she have left?



## Section 3

What number  
is 15 less than  
43?



## Section 4

$$38 + \square = 50$$

$$42 - \square = 29$$

$$51 - \square = 32$$

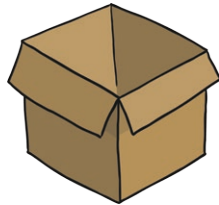
## Section 5

A pentagon  
has how many  
corners?

A heptagon  
has how many  
corners?

## Section 6

Tick the cylinders.



## Section 7

Carry on the sequence.

230, 240, 250, , ,



## Section 8

If  $163 = 100 + 60 + 3$ , then  $276$



# Year 2 Spring 1 Maths Activity Mat 4 Answers

## Section 1

Fill in the missing numbers.

34, 39, , 49, ,



## Section 2

Selima has £1.40.  
She spends 50p on  
a chocolate bar.  
How much does  
she have left?



## Section 3

What number  
is 15 less than  
43?

## Section 4

$$38 + \boxed{12} = 50$$

$$42 - \boxed{13} = 29$$

$$51 - \boxed{19} = 32$$

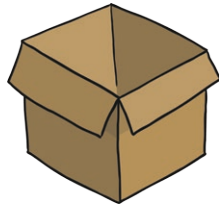
## Section 5

A pentagon  
has how many  
corners?

A heptagon  
has how many  
corners?

## Section 6

Tick the cylinders.



## Section 7

Carry on the sequence.

230, 240, 250, , ,



## Section 8

If  $163 = 100 + 60 + 3$ , then  $276$